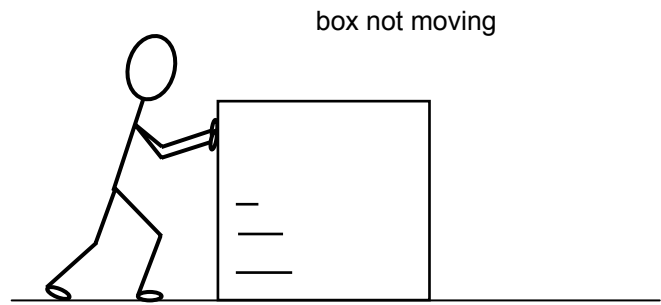



21

A construction worker is pushing a heavy box to move it across the floor.


But the box is **not moving**.



(a) On this diagram, mark with an arrow **the force exerted by the construction worker on the box**.



(b) On this diagram, mark with an arrow **the force exerted by the floor on the box (the friction force on the box)**.



(c) Is there a **force exerted by the box on the construction worker**? \_\_\_\_\_

If you think there is, mark it with an arrow on the diagram below.

