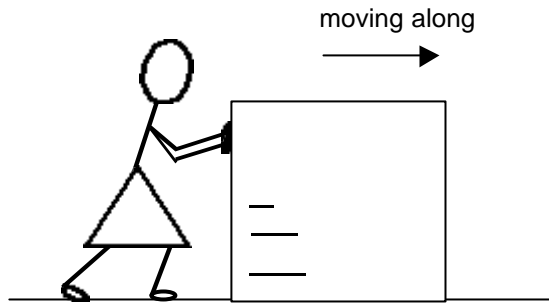



7

Karen is pushing a large box across the floor.


It is moving steadily.



(a) On this diagram, mark with an arrow **the force exerted by Karen on the box.**



(b) On this diagram, mark with an arrow **the force exerted by the floor on the box (the friction force on the box).**



(b) Is there a **force exerted by the box on Karen?** _____

If you think there is, mark it with an arrow on the diagram below.

