


6

A workman is trying to pull a heavy box across the floor.

The box but it is **not moving**.


box not moving



Each of the diagrams below shows one of the forces involved in this situation.


For each force, write a label that says clearly what the force is. Write it in the form:
force exerted by [something] on [something]

(a)



Label for this force: _____

(b)



Label for this force: _____